



MACHAKOS UNIVERSITY

University Examinations for 2019/2020 Academic Year

SCHOOL OF AGRICULTURAL SCIENCES

DEPARTMENT OF AGRIBUSINESS MANAGEMENT AND TRADE

SECOND YEAR SPECIAL/ SUPPLEMENTARY EXAMINATION FOR

BACHELOR OF SCIENCE IN AGRIBUSINESS MANAGEMENT

AGB 202: STATISTICS FOR AGRIBUSINESS

DATE: 21/01/2021

TIME: 8.30-10.30 AM

INSTRUCTIONS:

Answer **Question1** and **ANY TWO** other questions. Statistical tables are annexed.

QUESTION ONE (30 MARKS)

- a) Differentiate between the following terms as used in statistics
- A statistic and a parameter (2 marks)
 - A population and a sample (2 marks)
 - A discrete variable and continuous variable (2 marks)
 - Type I error and Type II error (2 marks)
 - Sampling error and coefficient of variation (2 marks)
- b) An agribusiness firm intends to promote its new products through giving gifts to its potential customers. How many unique gift packs, each containing 3 different products, can the firm make from its portfolio of 8 products? (2 marks)
- c) A poultry farmer sold 125 small eggs at Ksh 10 each, 230 medium eggs at Ksh 12 each, and 80 large eggs at Ksh 15 each. Find the weighted mean price of the eggs (2 marks).
- d) The following data shows the number of dairy goats kept by a sample of farmers: 3, 2, 4, 2, 3, 5 and 35. Show why you may not use the following as measures to summarize the data.
- Arithmetic mean (2 marks)
 - Mode (2 marks)

- e) A country's GDP growth in six consecutive years was 10%, 8.5%, 11.2%, 9.7%, -2.1% and 3.4%. Find the geometric mean GDP growth rate (2 marks)
- f) The weight of a packet of maize seeds follows a normal distribution with a mean of 2.0kg and standard deviation of 0.075 kg. Find the probability that a random packet weighs:
- More than 2.105 kg (2 marks)
 - Between 1.855 and 2.107 kg (3 marks)
- g) The table below shows average weekly household expenditures from a recent survey. Present the data in a pie chart (5 marks)

Expenditure item	Milk	Sugar	Maize	Beef	Vegetables
Amount spent (KSh)	600	75	145	450	180

QUESTION TWO (20 MARKS)

- a) The earnings per share (KSh) for a sample of 12 listed companies for the year 2017 were: 16.4, 0.1, 3.5, 0.4, 8.9, 10.1, 1.2, 6.4, 1.1, 1.5, 7.8, 3.2
- Find the interquartile range (7 marks)
 - Using the mean and the median, comment on the symmetry of the data (3 marks)
- b) A researcher assessing the age of coffee farmers in three counties obtained the following data. Test for the difference in mean farmer age across the counties (10 marks)

Month	County A	County B	County C
January	55	66	47
February	54	76	51
March	59	67	46
April	56	71	48

QUESTION THREE (20 MARKS)

- a) The data below shows sales revenue at each level of advertising cost incurred by Kilimo Ltd.

Advertising costs (Ksh million)	2	1	3	4
Sales revenue (Ksh million)	5	3	7	9

- i. Compute the regression equation for estimating the relationship between sales revenue and advertising budget (8 marks)
 - ii. Use the equation in (i) above to predict sales revenue for an advertisement budget of KSh 12 million (2 marks)
- b) Workers at ABC Company have complained that their overtime hours worked exceeded the 5 hours for which the company paid them. The management took a sample of 105 workers and found the average overtime hours worked in the previous week was 7.8, with standard deviation 4.1 hours. Test the validity of the workers' complaint (10 marks)

QUESTION FOUR (20 MARKS)

The frequency distribution below shows the number of employees in a sample of farms.

No. of workers	2 up to 6	6 up to 10	10 up to 14	14 up to 18	18 up to 22	22 up to 26	26 up to 30	30 up to 34
Frequency	8	11	23	38	45	32	19	4

- a) Calculate the:
 - i. Median (4 marks)
 - ii. Arithmetic mean (4 marks)
 - iii. Standard deviation (5 marks)
- b) A box contains 15 good oranges and 5 rotten ones. Three oranges are to be drawn sequentially from the box randomly without replacement. Using a probability tree, compute the probability that:
 - i. All oranges drawn will be rotten (3 marks)
 - ii. At least one orange will be good (4 marks)

QUESTION FIVE (20 MARKS)

- a) An exporter of cut flowers claims that roses from your two farms are not cut to the same length. As the production manager you sample 34 flower stems from one farm and 42 stems from the second farm and obtain mean stem lengths of 42.5cm and 40.8cm respectively. The population standard deviation of farm1 stems is 2.3cm while that of farm2 stems is 1.9cm. Show whether you find the exporter's claim statistically justified (8 marks)

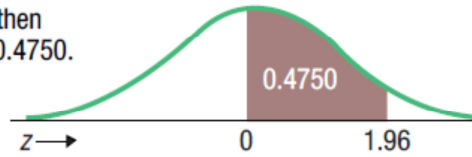
b) The marketing manager of Maziwa Ltd is interested in knowing daily demand for milk produced by their firm. A sample of customers reveals the following quantities (litres) purchased per customer.

4	4	4	3	3
3	5	8	5	6
4	2	5	2	5

- i. What is the best estimate of the population mean (2 marks)
- ii. Determine a 95 percent confidence interval for the mean (8 marks)
- iii. Explain whether the manager can reasonably conclude that the population mean is Ksh 6. (2 marks)

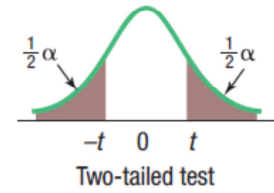
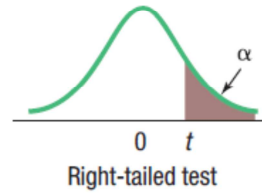
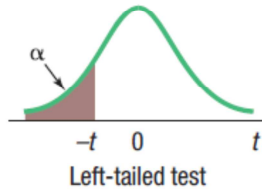
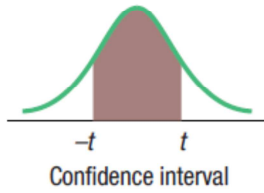
B.1 Areas under the Normal Curve

Example:
If $z = 1.96$, then
 $P(0 \text{ to } z) = 0.4750$.



z	0.00	0.01	0.02	0.03	0.04	0.05	0.06	0.07	0.08	0.09
0.0	0.0000	0.0040	0.0080	0.0120	0.0160	0.0199	0.0239	0.0279	0.0319	0.0359
0.1	0.0398	0.0438	0.0478	0.0517	0.0557	0.0596	0.0636	0.0675	0.0714	0.0753
0.2	0.0793	0.0832	0.0871	0.0910	0.0948	0.0987	0.1026	0.1064	0.1103	0.1141
0.3	0.1179	0.1217	0.1255	0.1293	0.1331	0.1368	0.1406	0.1443	0.1480	0.1517
0.4	0.1554	0.1591	0.1628	0.1664	0.1700	0.1736	0.1772	0.1808	0.1844	0.1879
0.5	0.1915	0.1950	0.1985	0.2019	0.2054	0.2088	0.2123	0.2157	0.2190	0.2224
0.6	0.2257	0.2291	0.2324	0.2357	0.2389	0.2422	0.2454	0.2486	0.2517	0.2549
0.7	0.2580	0.2611	0.2642	0.2673	0.2704	0.2734	0.2764	0.2794	0.2823	0.2852
0.8	0.2881	0.2910	0.2939	0.2967	0.2995	0.3023	0.3051	0.3078	0.3106	0.3133
0.9	0.3159	0.3186	0.3212	0.3238	0.3264	0.3289	0.3315	0.3340	0.3365	0.3389
1.0	0.3413	0.3438	0.3461	0.3485	0.3508	0.3531	0.3554	0.3577	0.3599	0.3621
1.1	0.3643	0.3665	0.3686	0.3708	0.3729	0.3749	0.3770	0.3790	0.3810	0.3830
1.2	0.3849	0.3869	0.3888	0.3907	0.3925	0.3944	0.3962	0.3980	0.3997	0.4015
1.3	0.4032	0.4049	0.4066	0.4082	0.4099	0.4115	0.4131	0.4147	0.4162	0.4177
1.4	0.4192	0.4207	0.4222	0.4236	0.4251	0.4265	0.4279	0.4292	0.4306	0.4319
1.5	0.4332	0.4345	0.4357	0.4370	0.4382	0.4394	0.4406	0.4418	0.4429	0.4441
1.6	0.4452	0.4463	0.4474	0.4484	0.4495	0.4505	0.4515	0.4525	0.4535	0.4545
1.7	0.4554	0.4564	0.4573	0.4582	0.4591	0.4599	0.4608	0.4616	0.4625	0.4633
1.8	0.4641	0.4649	0.4656	0.4664	0.4671	0.4678	0.4686	0.4693	0.4699	0.4706
1.9	0.4713	0.4719	0.4726	0.4732	0.4738	0.4744	0.4750	0.4756	0.4761	0.4767
2.0	0.4772	0.4778	0.4783	0.4788	0.4793	0.4798	0.4803	0.4808	0.4812	0.4817
2.1	0.4821	0.4826	0.4830	0.4834	0.4838	0.4842	0.4846	0.4850	0.4854	0.4857
2.2	0.4861	0.4864	0.4868	0.4871	0.4875	0.4878	0.4881	0.4884	0.4887	0.4890
2.3	0.4893	0.4896	0.4898	0.4901	0.4904	0.4906	0.4909	0.4911	0.4913	0.4916
2.4	0.4918	0.4920	0.4922	0.4925	0.4927	0.4929	0.4931	0.4932	0.4934	0.4936
2.5	0.4938	0.4940	0.4941	0.4943	0.4945	0.4946	0.4948	0.4949	0.4951	0.4952
2.6	0.4953	0.4955	0.4956	0.4957	0.4959	0.4960	0.4961	0.4962	0.4963	0.4964
2.7	0.4965	0.4966	0.4967	0.4968	0.4969	0.4970	0.4971	0.4972	0.4973	0.4974
2.8	0.4974	0.4975	0.4976	0.4977	0.4977	0.4978	0.4979	0.4979	0.4980	0.4981
2.9	0.4981	0.4982	0.4982	0.4983	0.4984	0.4984	0.4985	0.4985	0.4986	0.4986
3.0	0.4987	0.4987	0.4987	0.4988	0.4988	0.4989	0.4989	0.4989	0.4990	0.4990

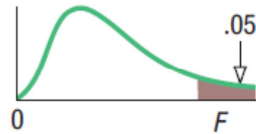
B.2 Student's *t* Distribution



Confidence Intervals, <i>c</i>						
<i>df</i>	80%	90%	95%	98%	99%	99.9%
	Level of Significance for One-Tailed Test, α					
	0.10	0.05	0.025	0.01	0.005	0.0005
	Level of Significance for Two-Tailed Test, α					
	0.20	0.10	0.05	0.02	0.01	0.001
1	3.078	6.314	12.706	31.821	63.657	636.619
2	1.886	2.920	4.303	6.965	9.925	31.599
3	1.638	2.353	3.182	4.541	5.841	12.924
4	1.533	2.132	2.776	3.747	4.604	8.610
5	1.476	2.015	2.571	3.365	4.032	6.869
6	1.440	1.943	2.447	3.143	3.707	5.959
7	1.415	1.895	2.365	2.998	3.499	5.408
8	1.397	1.860	2.306	2.896	3.355	5.041
9	1.383	1.833	2.262	2.821	3.250	4.781
10	1.372	1.812	2.228	2.764	3.169	4.587
11	1.363	1.796	2.201	2.718	3.106	4.437
12	1.356	1.782	2.179	2.681	3.055	4.318
13	1.350	1.771	2.160	2.650	3.012	4.221
14	1.345	1.761	2.145	2.624	2.977	4.140
15	1.341	1.753	2.131	2.602	2.947	4.073
16	1.337	1.746	2.120	2.583	2.921	4.015
17	1.333	1.740	2.110	2.567	2.898	3.965
18	1.330	1.734	2.101	2.552	2.878	3.922
19	1.328	1.729	2.093	2.539	2.861	3.883
20	1.325	1.725	2.086	2.528	2.845	3.850
21	1.323	1.721	2.080	2.518	2.831	3.819
22	1.321	1.717	2.074	2.508	2.819	3.792
23	1.319	1.714	2.069	2.500	2.807	3.768
24	1.318	1.711	2.064	2.492	2.797	3.745
25	1.316	1.708	2.060	2.485	2.787	3.725
26	1.315	1.706	2.056	2.479	2.779	3.707
27	1.314	1.703	2.052	2.473	2.771	3.690
28	1.313	1.701	2.048	2.467	2.763	3.674
29	1.311	1.699	2.045	2.462	2.756	3.659
30	1.310	1.697	2.042	2.457	2.750	3.646
31	1.309	1.696	2.040	2.453	2.744	3.633
32	1.309	1.694	2.037	2.449	2.738	3.622
33	1.308	1.692	2.035	2.445	2.733	3.611
34	1.307	1.691	2.032	2.441	2.728	3.601
35	1.306	1.690	2.030	2.438	2.724	3.591

Confidence Intervals, <i>c</i>						
<i>df</i>	80%	90%	95%	98%	99%	99.9%
	Level of Significance for One-Tailed Test, α					
	0.10	0.05	0.025	0.01	0.005	0.0005
	Level of Significance for Two-Tailed Test, α					
	0.20	0.10	0.05	0.02	0.01	0.001
36	1.306	1.688	2.028	2.434	2.719	3.582
37	1.305	1.687	2.026	2.431	2.715	3.574
38	1.304	1.686	2.024	2.429	2.712	3.566
39	1.304	1.685	2.023	2.426	2.708	3.558
40	1.303	1.684	2.021	2.423	2.704	3.551
41	1.303	1.683	2.020	2.421	2.701	3.544
42	1.302	1.682	2.018	2.418	2.698	3.538
43	1.302	1.681	2.017	2.416	2.695	3.532
44	1.301	1.680	2.015	2.414	2.692	3.526
45	1.301	1.679	2.014	2.412	2.690	3.520
46	1.300	1.679	2.013	2.410	2.687	3.515
47	1.300	1.678	2.012	2.408	2.685	3.510
48	1.299	1.677	2.011	2.407	2.682	3.505
49	1.299	1.677	2.010	2.405	2.680	3.500
50	1.299	1.676	2.009	2.403	2.678	3.496
51	1.298	1.675	2.008	2.402	2.676	3.492
52	1.298	1.675	2.007	2.400	2.674	3.488
53	1.298	1.674	2.006	2.399	2.672	3.484
54	1.297	1.674	2.005	2.397	2.670	3.480
55	1.297	1.673	2.004	2.396	2.668	3.476
56	1.297	1.673	2.003	2.395	2.667	3.473
57	1.297	1.672	2.002	2.394	2.665	3.470
58	1.296	1.672	2.002	2.392	2.663	3.466
59	1.296	1.671	2.001	2.391	2.662	3.463
60	1.296	1.671	2.000	2.390	2.660	3.460
61	1.296	1.670	2.000	2.389	2.659	3.457
62	1.295	1.670	1.999	2.388	2.657	3.454
63	1.295	1.669	1.998	2.387	2.656	3.452
64	1.295	1.669	1.998	2.386	2.655	3.449
65	1.295	1.669	1.997	2.385	2.654	3.447
66	1.295	1.668	1.997	2.384	2.652	3.444
67	1.294	1.668	1.996	2.383	2.651	3.442
68	1.294	1.668	1.995	2.382	2.650	3.439
69	1.294	1.667	1.995	2.382	2.649	3.437
70	1.294	1.667	1.994	2.381	2.648	3.435

B.4 Critical Values of the F Distribution at a 5 Percent Level of Significance



	Degrees of Freedom for the Numerator															
	1	2	3	4	5	6	7	8	9	10	12	15	20	24	30	40
1	161	200	216	225	230	234	237	239	241	242	244	246	248	249	250	251
2	18.5	19.0	19.2	19.2	19.3	19.3	19.4	19.4	19.4	19.4	19.4	19.4	19.4	19.5	19.5	19.5
3	10.1	9.55	9.28	9.12	9.01	8.94	8.89	8.85	8.81	8.79	8.74	8.70	8.66	8.64	8.62	8.59
4	7.71	6.94	6.59	6.39	6.26	6.16	6.09	6.04	6.00	5.96	5.91	5.86	5.80	5.77	5.75	5.72
5	6.61	5.79	5.41	5.19	5.05	4.95	4.88	4.82	4.77	4.74	4.68	4.62	4.56	4.53	4.50	4.46
6	5.99	5.14	4.76	4.53	4.39	4.28	4.21	4.15	4.10	4.06	4.00	3.94	3.87	3.84	3.81	3.77
7	5.59	4.74	4.35	4.12	3.97	3.87	3.79	3.73	3.68	3.64	3.57	3.51	3.44	3.41	3.38	3.34
8	5.32	4.46	4.07	3.84	3.69	3.58	3.50	3.44	3.39	3.35	3.28	3.22	3.15	3.12	3.08	3.04
9	5.12	4.26	3.86	3.63	3.48	3.37	3.29	3.23	3.18	3.14	3.07	3.01	2.94	2.90	2.86	2.83
10	4.96	4.10	3.71	3.48	3.33	3.22	3.14	3.07	3.02	2.98	2.91	2.85	2.77	2.74	2.70	2.66
11	4.84	3.98	3.59	3.36	3.20	3.09	3.01	2.95	2.90	2.85	2.79	2.72	2.65	2.61	2.57	2.53
12	4.75	3.89	3.49	3.26	3.11	3.00	2.91	2.85	2.80	2.75	2.69	2.62	2.54	2.51	2.47	2.43
13	4.67	3.81	3.41	3.18	3.03	2.92	2.83	2.77	2.71	2.67	2.60	2.53	2.46	2.42	2.38	2.34
14	4.60	3.74	3.34	3.11	2.96	2.85	2.76	2.70	2.65	2.60	2.53	2.46	2.39	2.35	2.31	2.27
15	4.54	3.68	3.29	3.06	2.90	2.79	2.71	2.64	2.59	2.54	2.48	2.40	2.33	2.29	2.25	2.20
16	4.49	3.63	3.24	3.01	2.85	2.74	2.66	2.59	2.54	2.49	2.42	2.35	2.28	2.24	2.19	2.15
17	4.45	3.59	3.20	2.96	2.81	2.70	2.61	2.55	2.49	2.45	2.38	2.31	2.23	2.19	2.15	2.10
18	4.41	3.55	3.16	2.93	2.77	2.66	2.58	2.51	2.46	2.41	2.34	2.27	2.19	2.15	2.11	2.06
19	4.38	3.52	3.13	2.90	2.74	2.63	2.54	2.48	2.42	2.38	2.31	2.23	2.16	2.11	2.07	2.03
20	4.35	3.49	3.10	2.87	2.71	2.60	2.51	2.45	2.39	2.35	2.28	2.20	2.12	2.08	2.04	1.99
21	4.32	3.47	3.07	2.84	2.68	2.57	2.49	2.42	2.37	2.32	2.25	2.18	2.10	2.05	2.01	1.96
22	4.30	3.44	3.05	2.82	2.66	2.55	2.46	2.40	2.34	2.30	2.23	2.15	2.07	2.03	1.98	1.94
23	4.28	3.42	3.03	2.80	2.64	2.53	2.44	2.37	2.32	2.27	2.20	2.13	2.05	2.01	1.96	1.91
24	4.26	3.40	3.01	2.78	2.62	2.51	2.42	2.36	2.30	2.25	2.18	2.11	2.03	1.98	1.94	1.89
25	4.24	3.39	2.99	2.76	2.60	2.49	2.40	2.34	2.28	2.24	2.16	2.09	2.01	1.96	1.92	1.87
30	4.17	3.32	2.92	2.69	2.53	2.42	2.33	2.27	2.21	2.16	2.09	2.01	1.93	1.89	1.84	1.79
40	4.08	3.23	2.84	2.61	2.45	2.34	2.25	2.18	2.12	2.08	2.00	1.92	1.84	1.79	1.74	1.69
60	4.00	3.15	2.76	2.53	2.37	2.25	2.17	2.10	2.04	1.99	1.92	1.84	1.75	1.70	1.65	1.59
120	3.92	3.07	2.68	2.45	2.29	2.18	2.09	2.02	1.96	1.91	1.83	1.75	1.66	1.61	1.55	1.50
∞	3.84	3.00	2.60	2.37	2.21	2.10	2.01	1.94	1.88	1.83	1.75	1.67	1.57	1.52	1.46	1.39