



# MACHAKOS UNIVERSITY

University Examinations for 2018/2019 Academic Year

SCHOOL OF AGRICULTURAL SCIENCES

DEPARTMENT OF AGRICULTURAL EDUCATION AND EXTENSION

SECOND YEAR SPECIAL/SUPPLEMENTARY EXAMINATION FOR

BACHELOR OF SCIENCE IN AGRICULTURAL EDUCATION AND EXTENSION

AGB 202: STATISTICS FOR AGRIBUSINESS

DATE: 27/9/2019

TIME: 11.00-1.00 PM

---

## INSTRUCTIONS:

Answer **Question 1** and **ANY TWO** other questions. Statistical tables are annexed.

### QUESTION ONE (30 MARKS)

- a) Differentiate between the following terms as used in statistics
- Type I error and Type II error (2 marks)
  - A population and a sample (2 marks)
  - Nominal and ordinal data (2 marks).
  - A statistic and a parameter (2 marks)
  - Negatively skewed and Positively skewed distribution (2 marks)
- b) The weight of a packet of fertilizer follows a normal distribution with a mean of 50.0kg and standard deviation of 0.35 kg. Find the probability that a random packet weighs:
- More than 50.9 kg (2 marks)
  - Between 49.5 and 50.8 kg (3 marks)
- c) A firm's sales revenue growth in five consecutive years was 5%, -2.5%, 14.2%, -1.5% and 6.7%. Compute the geometric mean revenue growth rate (2 marks)
- d) A farmer sold 86 small mangoes at Ksh 10 each, 596 medium sized mangoes at Ksh 16 each, and 219 large mangoes at Ksh 21 each. Find the weighted mean mango price (2 marks)

- e) The following data shows the farm size (acres) for a sample of seven farmers: 39, 3, 4, 2, 3, 5 and 55. Show why you may not use the following as measures to summarize the data.
- i) Arithmetic mean (2 marks)
  - ii) Mode (2 marks)
- f) Giving an example, explain the term “spurious correlation” (2 marks)
- g) A study of coffee farms showed that 76 were small-scale while 24 were large-scale. Of the small-scale, 47 had been in operation for 5 years and below, 22 had operated for 5-10 years, and 7 had been in operation for more than 10 years. For the large-scale farms, 2, 16 and 6 had been in operation for less than 5, 5-10, and over 10 years, respectively. Present this information in a contingency table. (5 marks)

**QUESTION TWO (20 MARKS)**

- a) The farm production (tons) for a sample of 12 farms for the year 2015 was: 0.1, 3.5, 0.4, 8.9, 10.1, 16.4, 1.2, 7.8, 6.4, 1.1, 3.2, 1.5
- i) Compute the coefficient of variation (4 marks)
  - ii) Find the interquartile range (4 marks)
- b) The Governor of Machakos County is interested in knowing the proportion of food insecure households in the County. From a sample of 15 Wards, the County Director of Agriculture obtained the following data on the percentage of food insecure households.

49	52	51	21	59
37	50	48	52	46
48	53	46	42	23

- i. What is the best estimate of the population mean level of food insecurity? (2 marks)
- ii. Determine a 98 percent confidence interval for the mean (8 marks)
- iii. Explain whether the Director can reasonably conclude that the population mean is 40%? (2 marks)

**QUESTION THREE (20 MARKS)**

- a) A box of milk has 20 good packets and 4 spoilt ones. Three packets are picked sequentially from the box randomly without replacement.
- i. Draw a probability tree for the exercise (5 marks)
  - ii. Find the probability that two packets are good and one is spoilt (3 marks)
  - iii. Compute the probability that at least one packet is spoilt (2 marks)
- b) A customer claims that eggs from two of your poultry farms are not of the same size. As the production manager you sample 68 eggs from one farm and 84 eggs from the second farm and obtain mean weights of 55.5gm and 53.8gm respectively. The population standard deviation of farm1 eggs is 2.3gm while that of farm2 eggs is 1.9gm. Show whether you find the consumer's claim statistically justified (10 marks)

**QUESTION FOUR (20 MARKS)**

- a) Workers at Kilimo Farm have complained that their wage is below the market average of KSh 500 per day. The management of Kilimo took a sample of 35 workers and found the average wage was KSh 465, with standard deviation KSh 130. Show whether the workers' complaint is valid. (8 marks)
- b) The frequency distribution below shows the number of tea factories in a sample of counties. Calculate the:
- i. Arithmetic mean (3 marks)
  - ii. Median (4 marks)
  - iii. Standard deviation (5 marks)

No. of workers	12 up to 16	16 up to 20	20 up to 24	24 up to 28	28 up to 32	32 up to 36	36 up to 40	40 up to 44
Frequency	8	11	23	38	45	32	19	4

**QUESTION FIVE (20 MARKS)**

- a) The data below shows loans accessed by farmers at each level of interest rate charged by financial institutions.

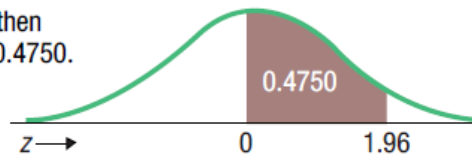
Loans accessed (Ksh million)	16	20	14	6
Average interest rate (%)	4	2	6	8

- i) Develop the regression equation for estimating the relationship between loans accessed and interest rate (8 marks)
- ii) Use the equation developed in (i) above to predict loan demand if the interest rate is fixed at 9% (2 marks)
- b) The following data shows the number of tractors sold in three countries in 2017, by model. Test for the difference in mean tractor sales across the countries (10 marks)

Model	County A	County B	County C
New Holland	5	17	3
John Deere	7	15	21
Massey Ferguson	10	38	13
Fiat	6	25	4

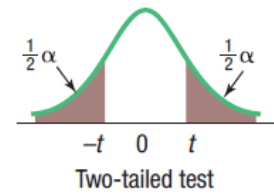
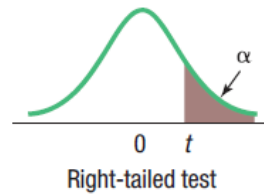
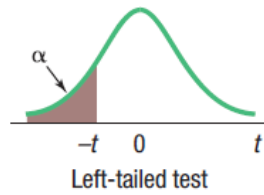
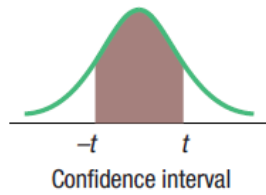
## B.1 Areas under the Normal Curve

Example:  
If  $z = 1.96$ , then  
 $P(0 \text{ to } z) = 0.4750$ .



$z$	0.00	0.01	0.02	0.03	0.04	0.05	0.06	0.07	0.08	0.09
0.0	0.0000	0.0040	0.0080	0.0120	0.0160	0.0199	0.0239	0.0279	0.0319	0.0359
0.1	0.0398	0.0438	0.0478	0.0517	0.0557	0.0596	0.0636	0.0675	0.0714	0.0753
0.2	0.0793	0.0832	0.0871	0.0910	0.0948	0.0987	0.1026	0.1064	0.1103	0.1141
0.3	0.1179	0.1217	0.1255	0.1293	0.1331	0.1368	0.1406	0.1443	0.1480	0.1517
0.4	0.1554	0.1591	0.1628	0.1664	0.1700	0.1736	0.1772	0.1808	0.1844	0.1879
0.5	0.1915	0.1950	0.1985	0.2019	0.2054	0.2088	0.2123	0.2157	0.2190	0.2224
0.6	0.2257	0.2291	0.2324	0.2357	0.2389	0.2422	0.2454	0.2486	0.2517	0.2549
0.7	0.2580	0.2611	0.2642	0.2673	0.2704	0.2734	0.2764	0.2794	0.2823	0.2852
0.8	0.2881	0.2910	0.2939	0.2967	0.2995	0.3023	0.3051	0.3078	0.3106	0.3133
0.9	0.3159	0.3186	0.3212	0.3238	0.3264	0.3289	0.3315	0.3340	0.3365	0.3389
1.0	0.3413	0.3438	0.3461	0.3485	0.3508	0.3531	0.3554	0.3577	0.3599	0.3621
1.1	0.3643	0.3665	0.3686	0.3708	0.3729	0.3749	0.3770	0.3790	0.3810	0.3830
1.2	0.3849	0.3869	0.3888	0.3907	0.3925	0.3944	0.3962	0.3980	0.3997	0.4015
1.3	0.4032	0.4049	0.4066	0.4082	0.4099	0.4115	0.4131	0.4147	0.4162	0.4177
1.4	0.4192	0.4207	0.4222	0.4236	0.4251	0.4265	0.4279	0.4292	0.4306	0.4319
1.5	0.4332	0.4345	0.4357	0.4370	0.4382	0.4394	0.4406	0.4418	0.4429	0.4441
1.6	0.4452	0.4463	0.4474	0.4484	0.4495	0.4505	0.4515	0.4525	0.4535	0.4545
1.7	0.4554	0.4564	0.4573	0.4582	0.4591	0.4599	0.4608	0.4616	0.4625	0.4633
1.8	0.4641	0.4649	0.4656	0.4664	0.4671	0.4678	0.4686	0.4693	0.4699	0.4706
1.9	0.4713	0.4719	0.4726	0.4732	0.4738	0.4744	0.4750	0.4756	0.4761	0.4767
2.0	0.4772	0.4778	0.4783	0.4788	0.4793	0.4798	0.4803	0.4808	0.4812	0.4817
2.1	0.4821	0.4826	0.4830	0.4834	0.4838	0.4842	0.4846	0.4850	0.4854	0.4857
2.2	0.4861	0.4864	0.4868	0.4871	0.4875	0.4878	0.4881	0.4884	0.4887	0.4890
2.3	0.4893	0.4896	0.4898	0.4901	0.4904	0.4906	0.4909	0.4911	0.4913	0.4916
2.4	0.4918	0.4920	0.4922	0.4925	0.4927	0.4929	0.4931	0.4932	0.4934	0.4936
2.5	0.4938	0.4940	0.4941	0.4943	0.4945	0.4946	0.4948	0.4949	0.4951	0.4952
2.6	0.4953	0.4955	0.4956	0.4957	0.4959	0.4960	0.4961	0.4962	0.4963	0.4964
2.7	0.4965	0.4966	0.4967	0.4968	0.4969	0.4970	0.4971	0.4972	0.4973	0.4974
2.8	0.4974	0.4975	0.4976	0.4977	0.4977	0.4978	0.4979	0.4979	0.4980	0.4981
2.9	0.4981	0.4982	0.4982	0.4983	0.4984	0.4984	0.4985	0.4985	0.4986	0.4986
3.0	0.4987	0.4987	0.4987	0.4988	0.4988	0.4989	0.4989	0.4989	0.4990	0.4990

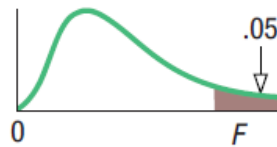
## B.2 Student's *t* Distribution



Confidence Intervals, <i>c</i>						
<i>df</i>	80%	90%	95%	98%	99%	99.9%
	Level of Significance for One-Tailed Test, $\alpha$					
	0.10	0.05	0.025	0.01	0.005	0.0005
	Level of Significance for Two-Tailed Test, $\alpha$					
	0.20	0.10	0.05	0.02	0.01	0.001
1	3.078	6.314	12.706	31.821	63.657	636.619
2	1.886	2.920	4.303	6.965	9.925	31.599
3	1.638	2.353	3.182	4.541	5.841	12.924
4	1.533	2.132	2.776	3.747	4.604	8.610
5	1.476	2.015	2.571	3.365	4.032	6.869
6	1.440	1.943	2.447	3.143	3.707	5.959
7	1.415	1.895	2.365	2.998	3.499	5.408
8	1.397	1.860	2.306	2.896	3.355	5.041
9	1.383	1.833	2.262	2.821	3.250	4.781
10	1.372	1.812	2.228	2.764	3.169	4.587
11	1.363	1.796	2.201	2.718	3.106	4.437
12	1.356	1.782	2.179	2.681	3.055	4.318
13	1.350	1.771	2.160	2.650	3.012	4.221
14	1.345	1.761	2.145	2.624	2.977	4.140
15	1.341	1.753	2.131	2.602	2.947	4.073
16	1.337	1.746	2.120	2.583	2.921	4.015
17	1.333	1.740	2.110	2.567	2.898	3.965
18	1.330	1.734	2.101	2.552	2.878	3.922
19	1.328	1.729	2.093	2.539	2.861	3.883
20	1.325	1.725	2.086	2.528	2.845	3.850
21	1.323	1.721	2.080	2.518	2.831	3.819
22	1.321	1.717	2.074	2.508	2.819	3.792
23	1.319	1.714	2.069	2.500	2.807	3.768
24	1.318	1.711	2.064	2.492	2.797	3.745
25	1.316	1.708	2.060	2.485	2.787	3.725
26	1.315	1.706	2.056	2.479	2.779	3.707
27	1.314	1.703	2.052	2.473	2.771	3.690
28	1.313	1.701	2.048	2.467	2.763	3.674
29	1.311	1.699	2.045	2.462	2.756	3.659
30	1.310	1.697	2.042	2.457	2.750	3.646
31	1.309	1.696	2.040	2.453	2.744	3.633
32	1.309	1.694	2.037	2.449	2.738	3.622
33	1.308	1.692	2.035	2.445	2.733	3.611
34	1.307	1.691	2.032	2.441	2.728	3.601
35	1.306	1.690	2.030	2.438	2.724	3.591

Confidence Intervals, <i>c</i>						
<i>df</i>	80%	90%	95%	98%	99%	99.9%
	Level of Significance for One-Tailed Test, $\alpha$					
	0.10	0.05	0.025	0.01	0.005	0.0005
	Level of Significance for Two-Tailed Test, $\alpha$					
	0.20	0.10	0.05	0.02	0.01	0.001
36	1.306	1.688	2.028	2.434	2.719	3.582
37	1.305	1.687	2.026	2.431	2.715	3.574
38	1.304	1.686	2.024	2.429	2.712	3.566
39	1.304	1.685	2.023	2.426	2.708	3.558
40	1.303	1.684	2.021	2.423	2.704	3.551
41	1.303	1.683	2.020	2.421	2.701	3.544
42	1.302	1.682	2.018	2.418	2.698	3.538
43	1.302	1.681	2.017	2.416	2.695	3.532
44	1.301	1.680	2.015	2.414	2.692	3.526
45	1.301	1.679	2.014	2.412	2.690	3.520
46	1.300	1.679	2.013	2.410	2.687	3.515
47	1.300	1.678	2.012	2.408	2.685	3.510
48	1.299	1.677	2.011	2.407	2.682	3.505
49	1.299	1.677	2.010	2.405	2.680	3.500
50	1.299	1.676	2.009	2.403	2.678	3.496
51	1.298	1.675	2.008	2.402	2.676	3.492
52	1.298	1.675	2.007	2.400	2.674	3.488
53	1.298	1.674	2.006	2.399	2.672	3.484
54	1.297	1.674	2.005	2.397	2.670	3.480
55	1.297	1.673	2.004	2.396	2.668	3.476
56	1.297	1.673	2.003	2.395	2.667	3.473
57	1.297	1.672	2.002	2.394	2.665	3.470
58	1.296	1.672	2.002	2.392	2.663	3.466
59	1.296	1.671	2.001	2.391	2.662	3.463
60	1.296	1.671	2.000	2.390	2.660	3.460
61	1.296	1.670	2.000	2.389	2.659	3.457
62	1.295	1.670	1.999	2.388	2.657	3.454
63	1.295	1.669	1.998	2.387	2.656	3.452
64	1.295	1.669	1.998	2.386	2.655	3.449
65	1.295	1.669	1.997	2.385	2.654	3.447
66	1.295	1.668	1.997	2.384	2.652	3.444
67	1.294	1.668	1.996	2.383	2.651	3.442
68	1.294	1.668	1.995	2.382	2.650	3.439
69	1.294	1.667	1.995	2.382	2.649	3.437
70	1.294	1.667	1.994	2.381	2.648	3.435

## B.4 Critical Values of the $F$ Distribution at a 5 Percent Level of Significance



	Degrees of Freedom for the Numerator															
	1	2	3	4	5	6	7	8	9	10	12	15	20	24	30	40
1	161	200	216	225	230	234	237	239	241	242	244	246	248	249	250	251
2	18.5	19.0	19.2	19.2	19.3	19.3	19.4	19.4	19.4	19.4	19.4	19.4	19.4	19.5	19.5	19.5
3	10.1	9.55	9.28	9.12	9.01	8.94	8.89	8.85	8.81	8.79	8.74	8.70	8.66	8.64	8.62	8.59
4	7.71	6.94	6.59	6.39	6.26	6.16	6.09	6.04	6.00	5.96	5.91	5.86	5.80	5.77	5.75	5.72
5	6.61	5.79	5.41	5.19	5.05	4.95	4.88	4.82	4.77	4.74	4.68	4.62	4.56	4.53	4.50	4.46
6	5.99	5.14	4.76	4.53	4.39	4.28	4.21	4.15	4.10	4.06	4.00	3.94	3.87	3.84	3.81	3.77
7	5.59	4.74	4.35	4.12	3.97	3.87	3.79	3.73	3.68	3.64	3.57	3.51	3.44	3.41	3.38	3.34
8	5.32	4.46	4.07	3.84	3.69	3.58	3.50	3.44	3.39	3.35	3.28	3.22	3.15	3.12	3.08	3.04
9	5.12	4.26	3.86	3.63	3.48	3.37	3.29	3.23	3.18	3.14	3.07	3.01	2.94	2.90	2.86	2.83
10	4.96	4.10	3.71	3.48	3.33	3.22	3.14	3.07	3.02	2.98	2.91	2.85	2.77	2.74	2.70	2.66
11	4.84	3.98	3.59	3.36	3.20	3.09	3.01	2.95	2.90	2.85	2.79	2.72	2.65	2.61	2.57	2.53
12	4.75	3.89	3.49	3.26	3.11	3.00	2.91	2.85	2.80	2.75	2.69	2.62	2.54	2.51	2.47	2.43
13	4.67	3.81	3.41	3.18	3.03	2.92	2.83	2.77	2.71	2.67	2.60	2.53	2.46	2.42	2.38	2.34
14	4.60	3.74	3.34	3.11	2.96	2.85	2.76	2.70	2.65	2.60	2.53	2.46	2.39	2.35	2.31	2.27
15	4.54	3.68	3.29	3.06	2.90	2.79	2.71	2.64	2.59	2.54	2.48	2.40	2.33	2.29	2.25	2.20
16	4.49	3.63	3.24	3.01	2.85	2.74	2.66	2.59	2.54	2.49	2.42	2.35	2.28	2.24	2.19	2.15
17	4.45	3.59	3.20	2.96	2.81	2.70	2.61	2.55	2.49	2.45	2.38	2.31	2.23	2.19	2.15	2.10
18	4.41	3.55	3.16	2.93	2.77	2.66	2.58	2.51	2.46	2.41	2.34	2.27	2.19	2.15	2.11	2.06
19	4.38	3.52	3.13	2.90	2.74	2.63	2.54	2.48	2.42	2.38	2.31	2.23	2.16	2.11	2.07	2.03
20	4.35	3.49	3.10	2.87	2.71	2.60	2.51	2.45	2.39	2.35	2.28	2.20	2.12	2.08	2.04	1.99
21	4.32	3.47	3.07	2.84	2.68	2.57	2.49	2.42	2.37	2.32	2.25	2.18	2.10	2.05	2.01	1.96
22	4.30	3.44	3.05	2.82	2.66	2.55	2.46	2.40	2.34	2.30	2.23	2.15	2.07	2.03	1.98	1.94
23	4.28	3.42	3.03	2.80	2.64	2.53	2.44	2.37	2.32	2.27	2.20	2.13	2.05	2.01	1.96	1.91
24	4.26	3.40	3.01	2.78	2.62	2.51	2.42	2.36	2.30	2.25	2.18	2.11	2.03	1.98	1.94	1.89
25	4.24	3.39	2.99	2.76	2.60	2.49	2.40	2.34	2.28	2.24	2.16	2.09	2.01	1.96	1.92	1.87
30	4.17	3.32	2.92	2.69	2.53	2.42	2.33	2.27	2.21	2.16	2.09	2.01	1.93	1.89	1.84	1.79
40	4.08	3.23	2.84	2.61	2.45	2.34	2.25	2.18	2.12	2.08	2.00	1.92	1.84	1.79	1.74	1.69
60	4.00	3.15	2.76	2.53	2.37	2.25	2.17	2.10	2.04	1.99	1.92	1.84	1.75	1.70	1.65	1.59
120	3.92	3.07	2.68	2.45	2.29	2.18	2.09	2.02	1.96	1.91	1.83	1.75	1.66	1.61	1.55	1.50
$\infty$	3.84	3.00	2.60	2.37	2.21	2.10	2.01	1.94	1.88	1.83	1.75	1.67	1.57	1.52	1.46	1.39